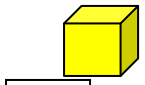
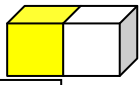


Counting Cubes

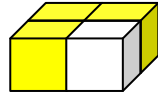
1. These solids have been built from unit cubes. Write down how many unit cubes have been used for each one.



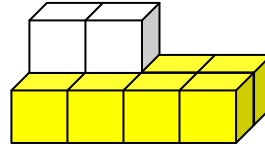
Unit cubes



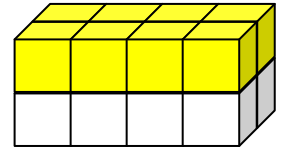
Unit cubes



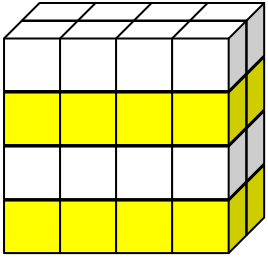
Unit cubes



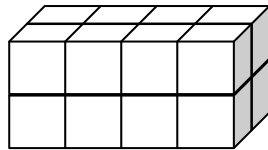
Unit cubes



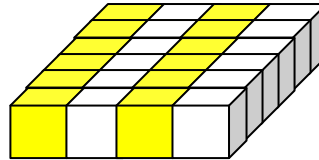
Unit cubes



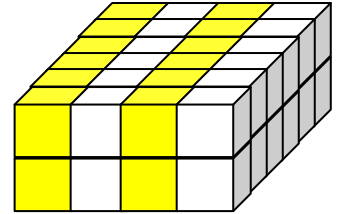
Unit cubes



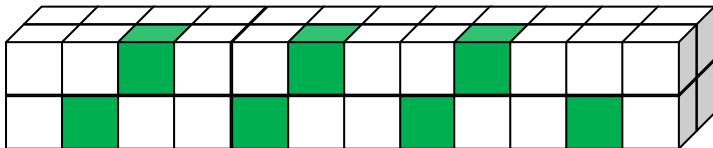
Unit cubes



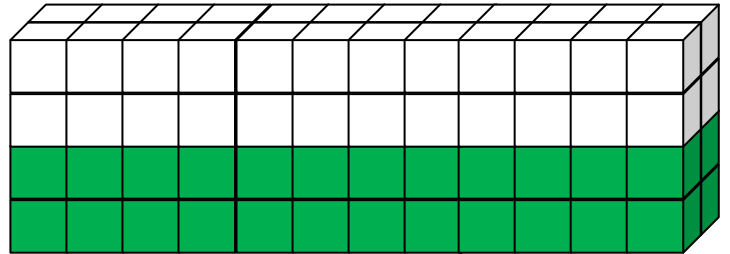
Unit cubes



Unit cubes

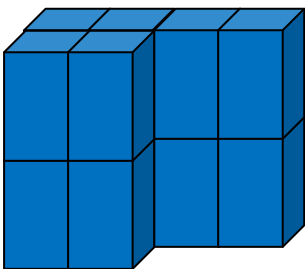


Unit cubes

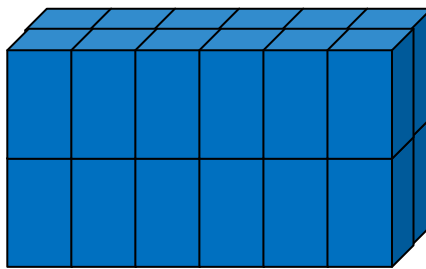


Unit cubes

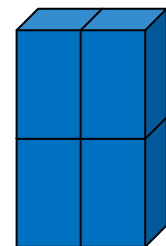
2. These solids have been built from 2-unit and 3-unit cubes. Write down how many unit cubes have been used for each one.



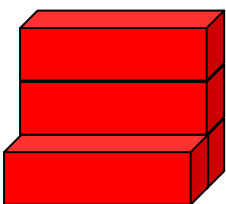
2-unit cubes



2-unit cubes



2-unit cubes



3-unit cubes



3-unit cubes