


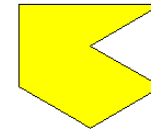



### Transformation Practice Worksheet

Label each figure with the correct transformational term. **Translation** (slide) **Rotation** (turn) **Reflection** (flip)



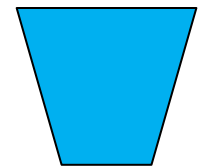





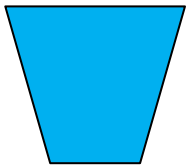
Polygon A  
Start →

\_\_\_\_\_










Polygon B  
Start →

\_\_\_\_\_



Polygon C  
Start →

\_\_\_\_\_



Polygon D  
Start →

\_\_\_\_\_